




**Holiday
Homework**



Class VII






SUMMER VACATION



Dear Parents,

- 
- 
- ❖ Long awaited Summer Holidays have commenced. It is a time to relax, rejuvenate, refresh and regain health. It is also a time to reduce stress & increase productivity.
 - ❖ Spend quality time with your kids and inculcate values.
 - ❖ Help and guide your ward in doing Holiday Homework.
 - ❖ Encourage your ward to converse in English.
 - ❖ Do some kind of physical exercises with your kids.
 - ❖ Read the Newspaper every day and encourage your ward to do so.



BE HEALTHY, BE HAPPY

Regards

GTB-011-46575555



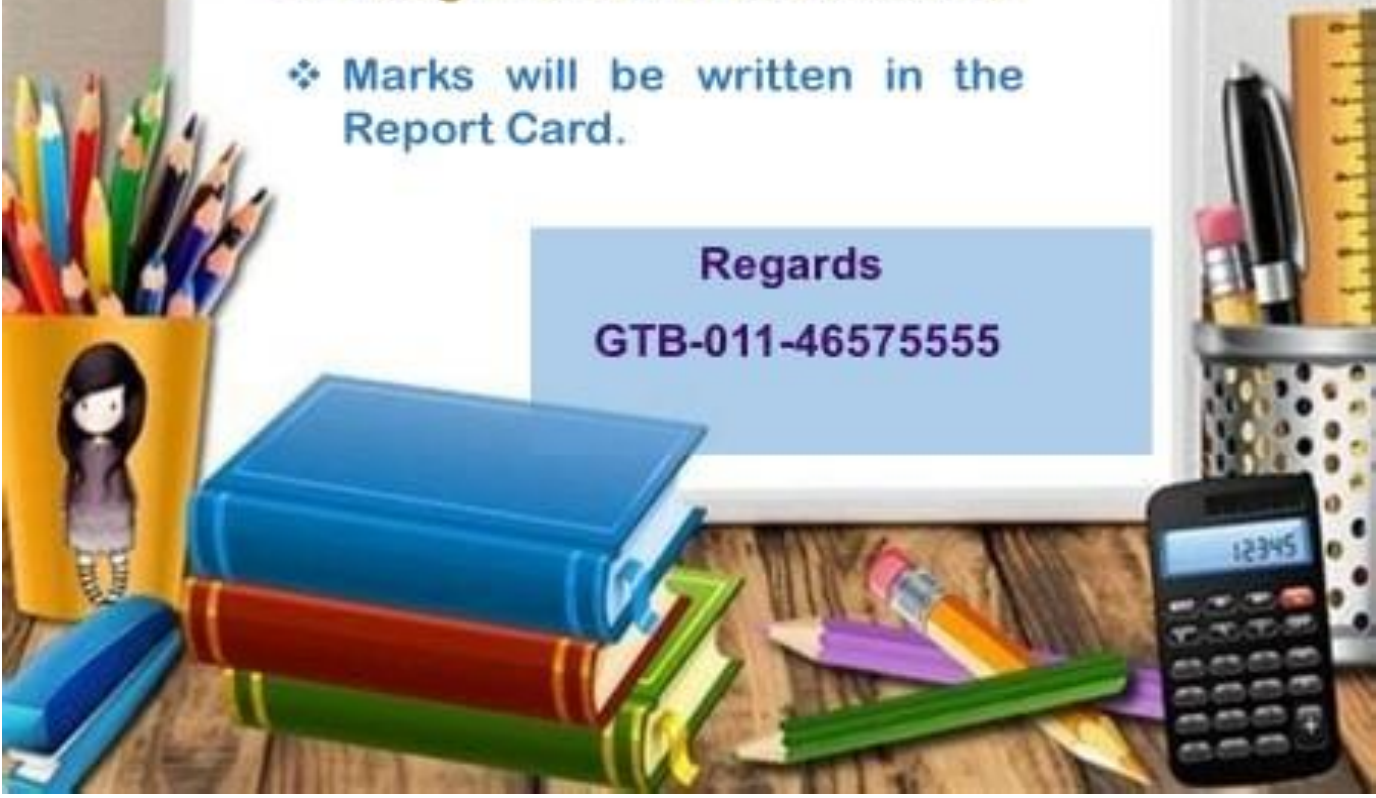


IMPORTANT NOTE

- ❖ All assignments have to be done on A4 size ruled sheets.
- ❖ Assignments have to be submitted to the Subject Teachers on the reopening day after Summer Vacation.
- ❖ Assignments will be assessed.
- ❖ Marks will be written in the Report Card.

Regards

GTB-011-46575555



Worksheet: 1**Subject: English****Class: 7****Name:** _____ **Class & Sec.** _____ **Roll No.** _____ **Date:** _____**Q1. Read the passage carefully:**

What causes the monsoon? The monsoon, which is essentially the seasonal reversal in wind direction, causes most of the rainfall received in India and some other parts of the world. The primary cause of monsoons is the difference between annual temperature trends over land and sea. The apparent position of the Sun with reference to the Earth oscillates from the Tropic of Cancer to the Tropic of Capricorn. Thus the low pressure region created by solar heating also changes latitude. The northeast and southeast trade winds converge in this low-pressure zone, which is also known as the Intertropical Convergence Zone or ITCZ. This low-pressure region sees continuous rise of moist wind from the sea surface to the upper layers of the atmosphere, where the cooling means the air can no longer hold so much moisture resulting in precipitation. The rainy seasons of East Asia, sub-Saharan Africa, Australia and the southern part of North America coincide with the shift of ITCZ towards these regions.

Now answer the following questions by choosing correct option:**1. Monsoon is**

- (a) A type of sea wave
- (b) a seasonal reversal in wind direction
- (c) very hot wind
- (d) very cold wind

2. What is the full form of ITCZ?

- (a) Intertrance Convergence Zone
- (b) Intertropical Convergence Zone
- (c) Intertropical Capricorn Zone
- (d) Intertropical Conveyance Zone.

3. The major cause of monsoon is the

- (a) difference between annual temperature trends over land and sea
- (b) difference between day and night temperature
- (c) moisture in the atmosphere
- (d) None of these.

4. Low pressure region is created by

- (a) solar heating
- (b) lunar cooling
- (c) moist wind
- (d) dry wind.

5. It rains when

- (a) moist wind goes down
- (b) dry wind meets moist wind
- (c) the air can no longer hold moisture resulting in precipitation
- (d) annual temperature goes down.

Q2. Complete the following blanks using Collective Noun:

- a) A _____ of musicians will perform in the party.
- b) Did you see the _____ of soldiers there.
- c) My _____ won the match by three goals.
- d) Police have arrested a _____ of thieves.
- e) A _____ of grapes was hanging from the vine.
- f) The _____ of bees flew into the garden.
- g) A _____ of people gathered on the road.
- h) Can you pass me the _____ of keys?
- i) My father bought a _____ o flowers for my mother.
- j) A _____ of dust swirled up during the storm.

Q3. Fill in the blanks using suitable 'articles' (a, an, the)

- a) _____ longest river of the world is Nile.
- b) He is reading _____ novel in _____ next room.
- c) What _____ view! I will come here again.
- d) She is _____ university student.
- e) Do you have _____ eraser?
- f) My father gave me _____ laptop.
- g) I saw _____ bird sitting on _____ tree in front of my house.
- h) Krishna is _____ honest man.
- i) Charles Babbage is considered as _____ father of computers.
- j) _____ Pacific Ocean is one of _____ five oceans of _____ world.

Q4. Answer the following questions:

- a) Who was Sadiq? What was his father's name?
- b) Which dish did Qadir make the best?
- c) What were Qadir's conditions for serving the dal?
- d) Why was a rich man like Nawab Hasan Ali willing to come to poor man's food stall?
- e) What happened when Sadiq went to call the Nawab for lunch?
- f) Why was there dead silence in the room? (Refer to the chapter- The All- American Slurp)
- g) What is the poet talks about in the poem – 'Deep in our refrigerator'?

कार्य पत्रिका 1

विषय – हिंदी

कक्षा – सातवीं

नाम _____ कक्षा वर्ग _____ दिनांक _____

साहित्य

प्रश्न 1 निम्नलिखित पद्यांश को पढ़कर प्रश्नों के उत्तर दीजिए।

जिसने पहला शूल हटाकर फूलों को सत्कारा है
मानवता के उस माली को सादर नमन हमारा है।

- क) उपरोक्त पंक्तियों की कविता तथा कवि का नाम लिखें।
- ख) कवि ने किसे नमन किया है?
- ग) फूल और फूल किसके प्रतीक हैं?
- घ) 'चमन' का समान लयवाला शब्द पंक्तियों में चुनकर लिखिए।
- ङ) मानवता का माली कौन है?
- च) निम्नलिखित शब्दों का वर्ण विच्छेद कीजिए।
सत्कार, मानवता
- छ) फूल का विलोम शब्द है।

प्रश्न 2 सही विकल्प चुनकर लिखिए।

क) अँधियारे को कैसे ललकारा गया है?

- चेतावनी देकर
- सूरज के द्वारा
- दीप जलाकर
- युद्ध की घोषणा करके

ख) पथिक कहाँ से गुजरा है ?

- निर्जन वन से
- शहर से
- हरे भरे वन से
- गाँव से

ग) पहला शूल हटाकर क्या किया गया है ?

- दूसरों की बाधाएँ दूर की है।
- मार्ग पर फूल बिछाए हैं।
- फूलों के पौधे लगाए हैं।
- खुशबू बिखेरी है।

घ) गांव के दोनों बालक जिनमें गहरी मित्रता थी, एक दूसरे को क्या कहकर पुकारते थे?

- दोस्त
- साथी
- सखा
- मीत

ङ) पूर्णिमा के दिन व्यापारी मित्र को राजा से दान में क्या मिला?

- सोने का घड़ा
- 100 मुद्राएँ
- 100 घोड़े
- 100 एकड़ जमीन

प्रश्न 3 कहानी के आधार पर हाँ या ना में उत्तर लिखिए।

- क) दो बालकों में गहरी मित्रता थी।
- ख) बेचारे व्यापारी के भाग्य पर वज्रपात हो गया।
- ग) मंत्री ने मीत के परिवार को भी बुलावा भेजा
- घ) मंत्री व्यापार में लग गया।
- ङ) मंत्री के बेटे को राजा ने समझाया।

प्रश्न 4 निम्नलिखित प्रश्नों के उत्तर दीजिए।

- क) व्यापारी मित्र का व्यापार नष्ट कैसे हो गया?
- ख) मंत्री ने अपने मित्र की सहायता कैसे की?
- ग) व्यापारी मित्र ने मंत्री के पुत्र को क्या समझाया ?
- घ) 'यह मेरा यह मीत का' पाठ में अध्यापक द्वारा सुनाई गई कहानी का लेखक के सहपाठियों पर क्या प्रभाव पड़ा?

Worksheet: 1**Subject: Punjabi****Class: 7****Name: _____****Class & Sec. _____****Roll No. _____****Date: _____****ਪ੍ਰਸ਼ਨ 1 ਹੇਠਾਂ ਲਿਖੇ ਸ਼ਬਦਾਂ ਦੇ ਬਹੁਵਚਨ ਲਿਖੋ:**

- (ੳ) ਮੁੰਡਾ
- (ਅ) ਕਾਪੀ
- (ੲ) ਨਦੀ
- (ਸ) ਕਹਾਣੀ
- (ਹ) ਤਿਤਲੀ

ਪ੍ਰਸ਼ਨ 2 ਹੇਠਾਂ ਦਿੱਤੇ ਸ਼ਬਦਾਂ ਦੇ ਲਿੰਗ ਬਦਲੋ:

- (ੳ) ਪੰਜਾਬੀ
- (ਅ) ਮੁਟਿਆਰ
- (ੲ) ਸੇਵਕਾ
- (ਸ) ਸ਼ੇਰ
- (ਹ) ਸ਼ਹਿਰੀ

ਪ੍ਰਸ਼ਨ 3 ਹੇਠਾਂ ਲਿਖੇ ਪ੍ਰਸ਼ਨਾਂ ਦੇ ਉੱਤਰ ਇਕ ਵਾਕ ਵਿੱਚ ਲਿਖੋ:

- (ੳ) ਰਾਜੂ ਕਿਹੜੀ ਜਮਾਤ ਵਿੱਚ ਪੜਦਾ ਸੀ?
- (ਅ) ਰਾਜੂ ਪੜਨ ਵਿੱਚ ਕਿਹੋ ਜਿਹਾ ਸੀ?
- (ੲ) ਰਾਜੂ ਨੇ ਕਿਹੜੀ ਪ੍ਰਤੀਯੋਗਤਾ ਵਿੱਚ ਭਾਗ ਲਿਆ?
- (ਸ) ਕੌਣ ਪ੍ਰਤੀਯੋਗਤਾ ਵਿੱਚ ਪਹਿਲੇ ਨੰਬਰ ਤੇ ਆਉਣਾ ਚਾਹੁੰਦਾ ਸੀ?

Worksheet: 1**Subject: French****Class: 7****Name:** _____ **Class & Sec.** _____ **Roll No.** _____ **Date:** _____**Q1 Complétez avec les adverbes de quantités.**

1. _____ cadeaux achètes-tu pour l'anniversaire de ta petite amie?
2. N'achetez pas de fromage! il y a _____ fromage dans le frigo.
3. J'ai _____ amis que ma sœur.
4. Aujourd'hui j'ai _____ devoirs à faire. N'invitez pas vos amis!
5. Émilie aime les bonbons; elle mange _____ bonbons.
6. Ma mère n'aime pas la viande, elle mange _____ viande.
7. Paul dépense _____ argent que moi.
8. Il y a _____ sucre dans mon café.

Q2 Complétez avec les adjectifs possessifs.

1. Ce sont _____ robes; où sont _____ robes?
2. J'aime _____ mère.
3. Est-ce que c'est _____ chien?
4. Prenez-vous _____ repas avec _____ famille?
5. C'est _____ fils.
6. Il met _____ cravates dans _____ armoire.
7. Tu pars en vacances avec _____ oncle n'est-ce pas?
8. Nous écrivons à _____ cousins à Paris.
9. Les Dupont sont _____ voisins.
10. Cette belle femme est _____ tante.

Worksheet: 1**Subject: Mathematics****Class: 7****Name:** _____**Class & Sec.** _____**Roll No.** _____**Date:** _____**Q1. Write a pair of integers whose sum is -8.****Q2. Write a pair of negative and positive integer whose difference is -3.****Q3. Find each of the following:**

a) $(-12) \times (-11) \times (10)$

b) $(-1) \times (-2) \times (-3) \times 4$

c) $13 \div [(-30) + (-1)]$

d) $[(-36) \div 12] \div 3$

Q4. In a test (+5) marks are given for every correct answer and (-2) marks are given for every incorrect answer.

a) Radhika answered all questions and scored 30 marks though she got 10 correct answers.

b) Jay also answered all the questions and scored (-12) marks though he got 4 correct answers. How many incorrect answers had they attempted?

Q5. Fill in blanks:

a) The multiplicative identity of integers is _____.

b) On dividing a negative integer by itself, the quotient is _____.

c) The integer which is its own additive inverse is _____.

d) Ram scored 40, -10, and 0 and Ramesh scored 10, 0, -40 in three successive tests. _____
Scored more.e) The difference in temperature -60°C and $+60^{\circ}\text{C}$ is _____.

Worksheet: 1**Subject: Science****Class: 7****Name: _____****Class & Sec. _____****Roll No. _____****Date: _____****NUTRITION IN PLANTS****Q1. Name the following:**

- 1) A plant pigment that absorbs sunlight.
- 2) Small openings on leaves.
- 3) Part of a plant where photosynthesis generally occurs.
- 4) A plant that eats insects is called as this.
- 5) The process by which plants and some bacteria use the energy from sun to produce carbohydrates.
- 6) The cells which form stomata.
- 7) The raw materials required for photosynthesis.
- 8) The gas released during photosynthesis.
- 9) The raw materials required for photosynthesis?
- 10) Name the elements of which carbohydrates are made up of?

Q2. Fill in the blanks:

- 1) The entire process of taking in food and using it for growth and maintenance of the body by the living organisms is called_____
- 2) The relationship in which the both the types of plants mutually gain from each other is called_____
- 3) _____is an association between a fungus and an algae.
- 4) During photosynthesis, plants obtain carbon di oxide from the atmosphere through_____.
- 5) _____is a parasitic plant that grow on mango tree.

Q3. Answer the following:

- 1) What are nutrients? Give examples.
- 2) What is nutrition? Name the major modes of nutrition.
- 3) Differentiate between autotrophs and heterotrophs.
- 4) What is photosynthesis? Write equation for photosynthesis.
- 5) Where are stomata located? Write two important functions performed by stomata.
- 6) How are the minerals and water reach the leaves from the roots?
- 7) How does chlorophyll help in the process of Photosynthesis?
- 8) How do we test the presence of starch in the leaves?

- 9) Draw and label a neat diagram of stomata.
- 10) What are algae? Are they autotrophs?
- 11) How do plants obtain nitrogen to synthesis proteins?
- 12) Define host and parasite?
- 13) What are insectivorous plants? How do they obtain food?
- 14) What is saprotrophic mode of nutrition?
- 15) Why do farmers add fertilizers to the soil?
- 16) How are leguminous crops and Rhizobium related to each other?

Worksheet: 1**Subject: Social Science****Class: 7****Name: _____****Class & Sec. _____****Roll No. _____****Date: _____****HISTORY AND CIVICS****A. Fill in the blanks:**

1. Cartographer is a person who makes _____.
2. Manuscripts were stored and placed at _____.
3. Ziyauddin Barani wrote his first chronicle in _____ century.
4. _____ provide a lot of information to the historians.
5. Rules and regulations of Jatis were enforced by _____.
6. The two sects of Muslims are _____ and _____.
7. _____ were the people who copied manuscripts.
8. _____ was the first state to introduce Mid-day meal scheme.
9. Our constitution recognizes everyone as equal before the _____.
10. _____ refers to thinking of oneself and other persons as worthy of respect.

B. Answer the following questions in one word:

1. In which century Babur used the term 'Hindustan' to describe the geography of the subcontinent?
2. Who made the first map of Indian Subcontinent?
3. Name the first chronicler of 13th century.
4. Name the holy book of Muslims.
5. Name the sultan of Delhi who was praised in the Prashasti.
6. Which Article in the Indian Constitution defines equality and prohibits any kind of social discrimination?
7. _____ states that every adult in a country, irrespective of their wealth and the communities he/she belongs to, has one vote.
8. Name the movement which demanded an end to Racial Discrimination.
9. _____ is a document which lays down the basic rules and regulation for the people and government in the country to follow.
10. Civil right movement was a movement of which country?

C. Answer the following questions:

- Q1. In what ways has the meaning of the term 'Hindustan' changed over the centuries?
- Q2. List some of the technological changes associated during the medieval period.
- Q3. How do historians divide the past into periods? Do they face any problem in doing so?
- Q4. How were the affairs of Jatis regulated?
- Q5. What were some of the major religious developments during the medieval period?
- Q6. Mention some provisions provided by the Constitution of India.
- Q7. What is Mid-day meal? Mention some advantages of it.
- Q8. Mention any two ways in which the government has tried to implement the equality that is Guaranteed in the Constitution.
- Q9. What do you mean by 'All persons are equal before the law'? Why do you think it is important in a democracy?
- Q10. State two ways in which the article 15 addresses inequality.
- Q11. In a democracy why is 'Universal Adult Franchise' important?
- Q12. Explain civil rights movement. What was the aim of the movement

Worksheet: 1**Subject: Computer****Class: 7****Name: _____ Class & Sec. _____ Roll No. _____ Date: _____****Q1. Select the correct answer:**


- The other name given to Y-axis is _____.
 - Value axis
 - Data series
 - Category axis
 - None of the Above
- The other name given to X-axis is _____.
 - Legend
 - Category axis
 - Plot Area
 - None of the Above
- _____ filter is used to display data that satisfies more than one condition.
 - Custom
 - Text
 - Number
 - None of the above

Q2. Fill in the blanks:

- _____ in the ascending and descending order is known as sorting data.
- _____ are the labels displayed on the X-axis and Y-axis.
- Filtering Hides the data _____.

Q3. Answer the following:

- Write one advantage of using chart.
- Define Legend.
- Write the names of the following Chart Elements: -



Worksheet: 2**Subject: English****Class: 7****Name:** _____ **Class & Sec.** _____ **Roll No.** _____ **Date:** _____**Q1. Rearrange the following words to form meaningful sentences.**

- a) she/ interested/ that/ was/ in/ proposal/ said/ she/ the
- b) was/ performance/ impressed/ with/ quite/ her/ I
- c) the/ Please/ not/ do/ on/ grass/ step
- d) Peacock/ a/ beautiful/ is/ a/ bird
- e) neck/ feathers/ covered/ is/ lovely/ its/ with
- f) in France/ situated/ Eiffel Tower/ is
- g) is quite/ to our/ close/ the supermarket/ house
- h) vital for/ is/ Sufficient sleep/ good health
- i) in front of/ has been/ The park/ our house/ closed
- j) said that/ anger/ it is/ is one's/ enemy/ worst

Q2. State the kind of the following sentences:

- a) He wants to eat cookies.
- b) How much does it cost?
- c) Turn left at the bridge.
- d) What a funny story he told us!
- e) Why didn't you meet her?
- f) What an exciting movie it was!
- g) The wind is blowing from the west.
- h) Please get out of the room.
- i) The coffee shop isn't open on Sundays.
- j) What time does the concert start?

Q3. Choose the right option to answer the following questions:

- a) **Why did Qadir lose a lot of customers?**
 - i) He was a very messy cook.
 - ii) He was a very fussy cook.
 - iii) He charged a lot of money for the food.

- b) **Why was Sadiq worried when Nawab refused to respond to his call immediately?**
- i) His father would give away the dal
 - ii) His father would have to cook a new dish
 - iii) His father would blame him for it
- c) **At the Chinese dinner, the narrator was shocked when she saw-**
- i) Meg's plate with food from both the dishes
 - ii) Her mother shake her head
 - iii) People laugh at the Gleasons
- d) **The narrator's family did not dip their celery into the sour cream because-**
- i) There was not too much of it
 - ii) They did not like dairy products
 - iii) It was spoilt

Q4. Answer the following questions:

- a) What happens to the food in the refrigerator after a month?
 - b) Why was the narrator horrified by Mr. Gleason?
 - c) Why did the narrator and her brother keep looking at their parents?
 - d) Why does the mother feel a sense of regret while dumping old food?
 - e) "When finally, it all becomes
a nasty mass of slime
my mother takes it out and says,
'Apparently, it's time.'
- i) Name the poem.
 - ii) What becomes 'a nasty mass of slime'?
 - iii) When does it become a nasty mass of slime?
 - iv) What does the mother mean when she says 'Apparently, it's time'?

कार्य पत्रिका 2
विषय – हिंदी
कक्षा – सातवीं

नाम _____ कक्षा वर्ग _____ दिनांक _____

व्याकरण

प्रश्न 1 निम्न शब्दों के वर्ण विच्छेद करो।

दुर्बल, निर्जन, क्षमा, मित्र उजियारे निर्जीव, मंत्र, मुद्राएँ, व्यापारी ।

प्रश्न 2 “स” उपसर्ग लगाकर नया शब्द बनाओ ।

परिवार, जीव, फल, चित्र, गुण

प्रश्न 3 वाक्यांशों के लिए एक शब्द लिखो।

पथ पर चलने वाला

मीठा बोलने वाला

परिवार के साथ आदर के साथ

कटु बोलने वाला

जहाँ कोई जन न रहता हो अच्छे आचरण वाला

प्रश्न 4 निम्नलिखित वाक्यों में रेखांकित संज्ञा शब्दों के भेद लिखो।

क) डाकूओं ने सारी संपत्ति लूट ली पहाड़ों से नदियाँ निकलती है।

ख) पुत्र अध्ययन में चौगुने उत्साह से लग गया

ग) गौतम बुद्ध ने डाकू को सुधारा ।

घ) पहाड़ों से नदियाँ निकलती हैं।

प्रश्न 5 अनेकार्थक शब्दों का अर्थ लिखते हुए उन्हें वाक्य में प्रयोग कीजिए।

लाख- लाख

नाना- नाना

Worksheet: 2**Subject: Mathematics****Class: 7****Name: _____ Class & Sec. _____ Roll No. _____ Date: _____****Q1. Multiply and reduce to lowest form and convert into mixed fraction:**

a) $11 \times \frac{4}{7}$

b) $15 \times \frac{3}{5}$

c) $5 \times 6\frac{3}{4}$

d) $3\frac{1}{4} \times 6$

e) $\frac{11}{2} \times \frac{3}{10}$

Q2. Sushant reads $\frac{1}{3}$ part of a book in 1 hour. How much part of the book will he read in $2\frac{1}{5}$ hours?**Q3. Which is greater $\frac{2}{3}$ of $\frac{3}{4}$ or $\frac{3}{5}$ of $\frac{5}{8}$** **Q4. The side of an equilateral triangle is 3.5cm Find its perimeter.****Q5. Find:**

a) 2×0.46

b) 31.1×100

c) 10.5×1.05

d) $651.2 \div 4$

e) $4.5 \div 100$

f) $7.75 \div 0.25$

Q6. A car covers a distance of 89.1 km in 2.2 hours. What is the average distance covered by it in 1 hour?**Q7. Each side of a regular polygon is 2.5 cm in length. The perimeter of the polygon is 12.5 cm. How many sides does a polygon have?**

Worksheet: 2**Subject: Science****Class: 7****Name:** _____**Class & Sec.** _____**Roll No.** _____**Date:** _____**Q1. Match the following:****Column A**

- a. Liver
- b. Large intestine
- c. Rectum
- d. Stomach
- e. Villi

Column B

- i. Acid release
- ii. Release of faecal matter
- iii. Absorption of digested food
- iv. Bile release
- v. Absorption of water

Q2. Fill in the blanks.

- a) Saliva is secreted in the mouth by _____
- b) Largest gland in human body is _____
- c) Tongue helps in _____ and _____
- d) Pancreatic juice is released in _____
- e) HCl is released in _____.

Q3. What is mastication?**Q4. What are Peristalsis?****Q5. What is digestion? Why it is important?****Q6. Name the enzyme or juices released from the following glands in human digestive system.**

- a) Salivary glands
- b) Pancreas
- c) Liver

Q7. Write (T) for true and (F) for false statement.

- a) The large intestine absorbs water and minerals.
- b) Pancreas is the largest gland in our body.
- c) Amoeba ingests food with the help of pseudopodia.
- d) Villi help in digestion of food.
- e) Animals can digest cellulose.

Q8. Where is bile produced? Which component of the food does it help to digest?**Q9. What are villi? Write its function?****Q10. Differentiate between partial parasites and parasites?**

Worksheet: 2**Subject: Social Science****Class: 7****Name:** _____**Class & Sec.** _____**Roll No.** _____**Date:** _____

GEOGRAPHY

A. Fill in the blanks:

1. Two main constituents of environment are _____ and _____.
2. _____ is the hard top layer of the Earth.
3. The domain of water is referred to as _____.
4. Lithosphere is made up of _____.
5. _____ has thin layer of air that surrounds the earth.
6. _____ is our basic life support system.
7. Land, water, air, plants and animals comprise _____ environment.
8. _____ revolution enabled large scale production.
9. A perfect balance is necessary between the natural and _____ environment.
10. Change in environment produces change in _____.

B. Answer the following questions in one word:

1. The word environment is derived from the word “environer” which means _____.
2. Who protect earth from the harmful rays and scorching heat of the sun?
3. When is world’s environment day celebrated every year?
4. Name the two major components of biotic environment.
5. Name the system in which goods are exchanged without the use of money.

C. Answer the following questions.

- Q1. What is an ecosystem?
- Q2. Explain the domains of environment.
- Q3. Which are the major components of environment? Explain with examples.
- Q4. Define the term environment.
- Q5. Differentiate between biotic and abiotic component.
- Q6. How is the climate and vegetation of Kerala different from that of Jaisalmer in Rajasthan?
- Q7. Give reasons for your answer –
- i. Man modifies his environment.
 - ii. Plants and Animals depend on each other.

Worksheet: 2**Subject: Computer****Class: 7****Name:** _____ **Class & Sec.** _____ **Roll No.** _____ **Date:** _____**Q1. Select the correct answer:**

1. Syntax are set of _____
 - i. Rules
 - ii. Punctuation
 - iii. Program
 - iv. None of the Above

2. _____ are storage locations used to store values in computer memory.
 - i. RAM
 - ii. Variable
 - iii. ROM
 - iv. None of the Above

Q2. Fill in the blanks:

1. _____ are set of reserved words having special meaning.
2. _____ value, return True or False.
3. _____ shows the error in the statement.

Q3. Answer the following:

1. What are operators? How many types of operators are available in Python?
2. What is the use of Arithmetic operator?
3. Write a program to convert centimetre into meter.
4. Write a program to print your name & address using input & print function.